



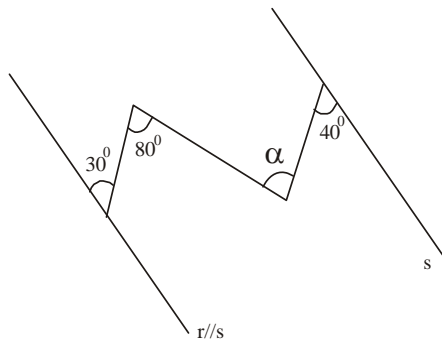
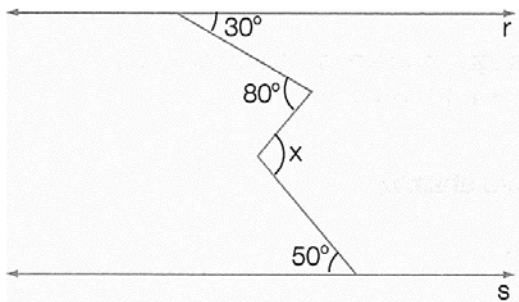
8º ano Matemática

Tarefa 16 – Professor Luan

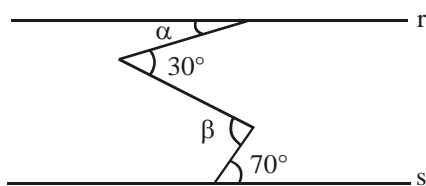
Ângulos formados por duas retas paralelas cortadas por uma transversal ("Teorema dos Bicos")

Nas questões 01, 03, 04, 05 e 06, determinar as letras em cada figura admitindo o paralelismo entre as retas r e s .

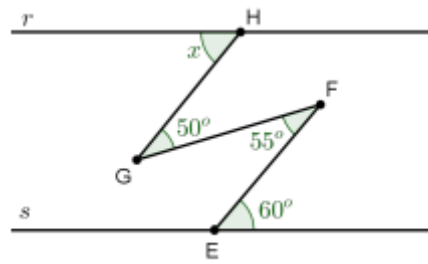
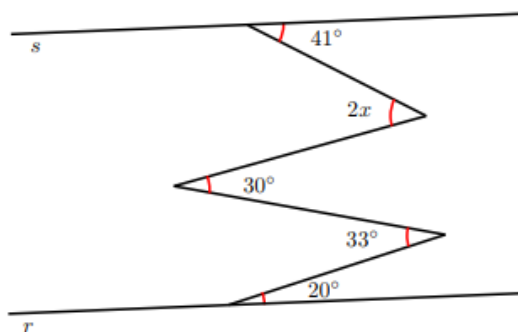
01.



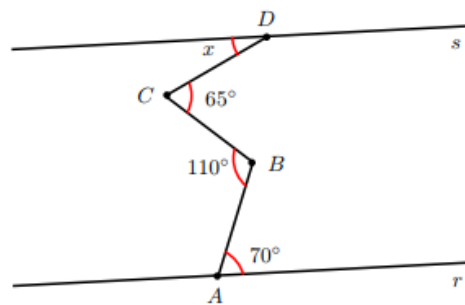
02. Na figura abaixo têm-se as retas r e s , paralelas entre si, e os ângulos assinalados, em graus. Determine $\alpha + \beta$.



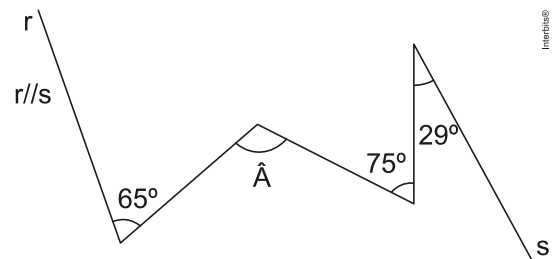
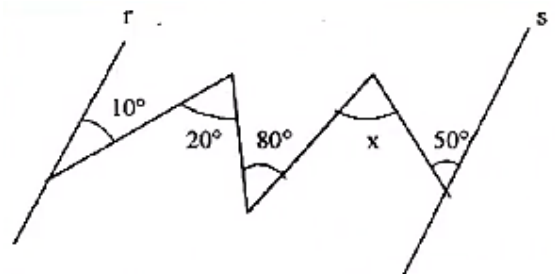
03.



04.



05.



06.

