



8º ano

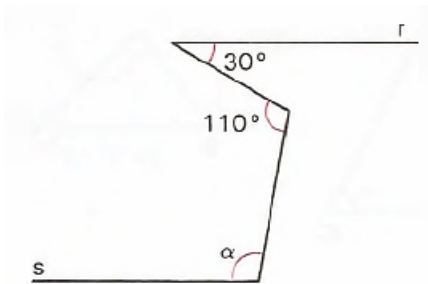
Matemática

Tarefa 15 – Professor Luan

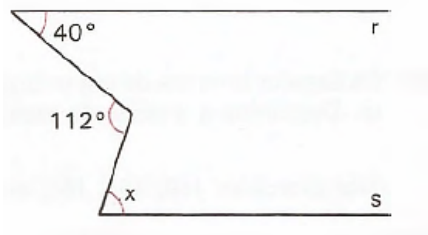
Ângulos formados por duas retas paralelas cortadas por uma transversal

Das questões 01 a 05, determinar as letras em cada figura admitindo o paralelismo subentendido entre as retas.

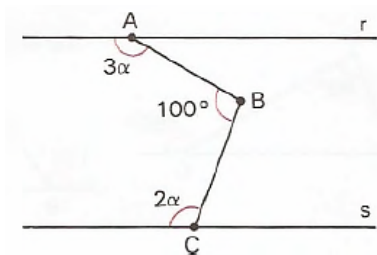
01.



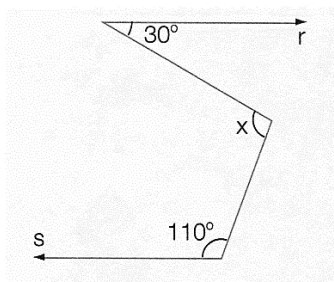
02.



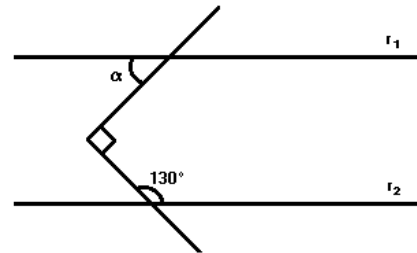
03.



04.



05.



06. Na figura, as retas r e s são paralelas, o ângulo 1 mede 45° e o ângulo 2 mede 55° . Qual a medida em graus, do ângulo 3?

