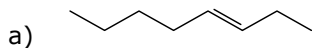


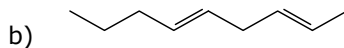


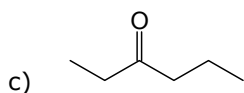
8º ano
Química

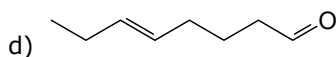
Tarefa 15 – Professor Gustavo

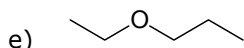
01. Indique a fórmula molecular, grupo funcional e a nomenclatura oficial dos compostos a seguir:

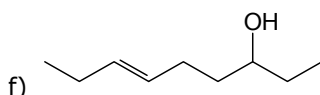


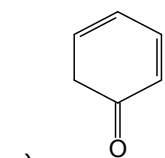




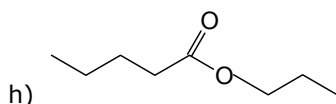




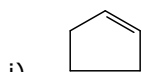




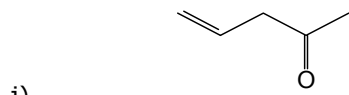
g) _____



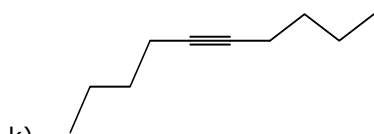
h) _____



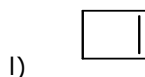
i) _____



j) _____



k) _____



l) _____



02. Monte as estruturas das moléculas a seguir:

a) Etano

b) Eteno

c) Etanol

d) Hexan-3-ol

e) cicloex-3-enona

f) hept-4-enal

g) pentanoato de propanoila

h) etoxipropano

i) ácido pentanoico

j) butan-2-ona

k) ácido propanoico

l) hexan-2-ona

m) oct-5-en-2-ol

n) butanal