



8º ano

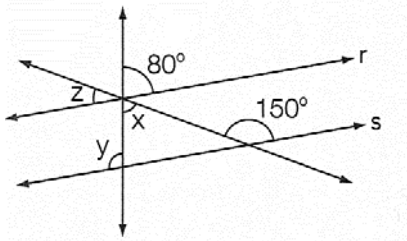
# Matemática

## Tarefa 14 – Professor Luan

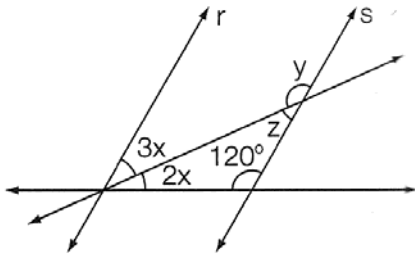
### Ângulos formados por duas retas paralelas cortadas por uma transversal

Das questões 01 a 06, determinar as medidas dos ângulos indicados por letras em cada figura admitindo o paralelismo subentendido entre as retas.

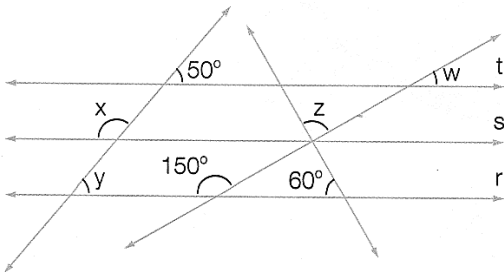
01.



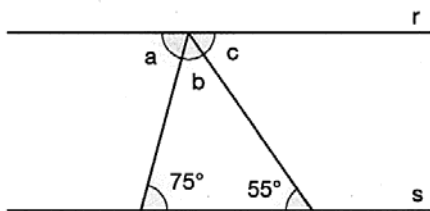
02.



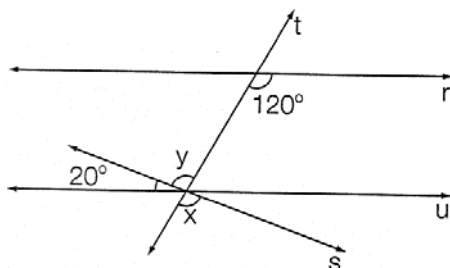
03.



04.



05.





06.

