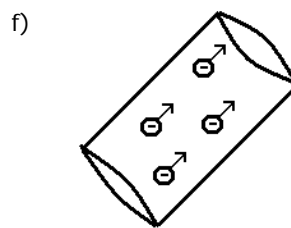
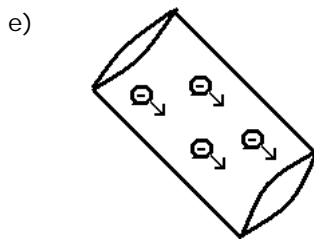
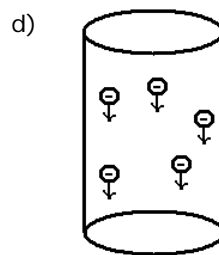
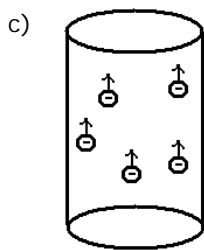
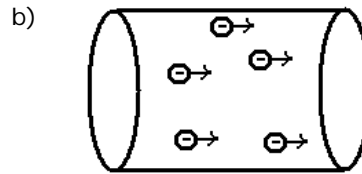
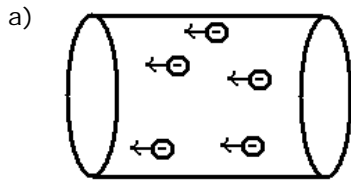




Tarefa 14 - Professor Moisés

01. Determine o sentido convencional da corrente elétrica no fio condutor: (1 linha por item)



02. Determine a intensidade da corrente elétrica desconhecida. (Obs: As setas que representam as correntes não estão em escala) (1 linha por item)

